
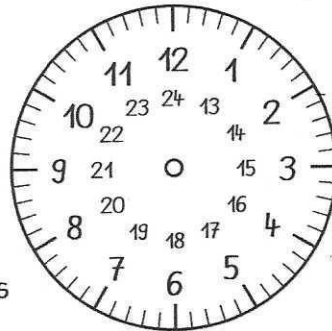



Ma/Zeit

Name:



Uhrzeiten - Der Tag hat 24 Stunden






viertel nach 8 Uhr morgens
08:15 Uhr

viertel nach 8 Uhr abends
20:15 Uhr



morgens
tagsüber



abends
nachts



11:45 Uhr



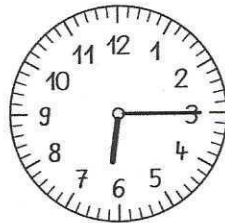
_____ Uhr

12:00 Uhr

_____ Uhr

18:30 Uhr

_____ Uhr



4:15 Uhr

6:15 Uhr

8:45 Uhr





_____ Uhr

_____ Uhr

_____ Uhr

_____ Uhr

23:30 Uhr



7:15 Uhr

12:30 Uhr

_____ Uhr


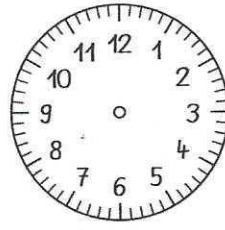


_____ Uhr

_____ Uhr

_____ Uhr

22:45 Uhr

22:00 Uhr



_____ Uhr



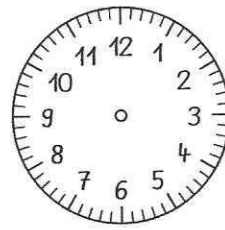

4:15 Uhr

_____ Uhr

19:30 Uhr

_____ Uhr

23:00 Uhr



_____ Uhr

_____ Uhr

10:15 Uhr

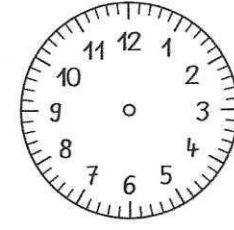



_____ Uhr

18:00 Uhr

14:45 Uhr

_____ Uhr

23:15 Uhr



1:45 Uhr

9:45 Uhr

5:45 Uhr

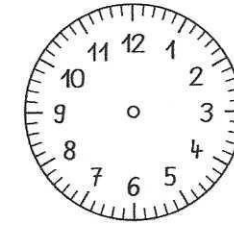
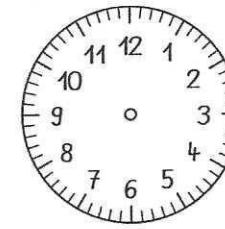
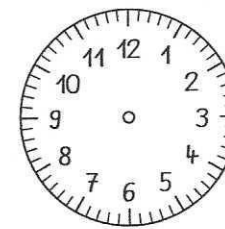

12:45 Uhr

_____ Uhr

_____ Uhr

_____ Uhr

_____ Uhr



_____ Uhr

5:45 Uhr

_____ Uhr

_____ Uhr

13:45 Uhr

_____ Uhr

20:45 Uhr

0:45 Uhr