


Ma/Zeit


Name:



Uhrzeiten - Der Tag hat 24 Stunden






6 Uhr morgens
06:00 Uhr



6 Uhr abends
18:00 Uhr



morgens
tagsüber



abends
nachts



_____ Uhr

_____ Uhr


_____ Uhr



_____ Uhr


_____ Uhr

_____ Uhr




_____ Uhr

_____ Uhr




_____ Uhr

_____ Uhr




_____ Uhr

_____ Uhr




_____ Uhr

_____ Uhr




_____ Uhr

_____ Uhr




_____ Uhr

_____ Uhr





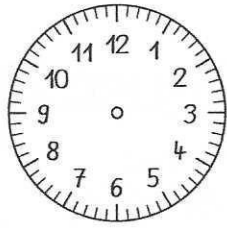

_____ Uhr

_____ Uhr



_____ Uhr

_____ Uhr



_____ Uhr

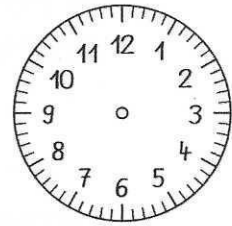
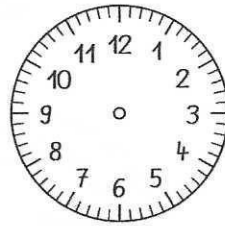
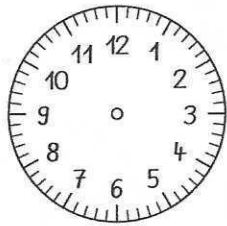

11:00 Uhr

_____ Uhr

21:00 Uhr

_____ Uhr

14:00 Uhr



4:00 Uhr

_____ Uhr

4:00 Uhr



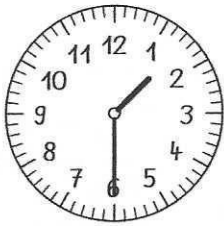
_____ Uhr

_____ Uhr

15:00 Uhr

_____ Uhr

22:00 Uhr



1:30 Uhr

_____ Uhr

_____ Uhr

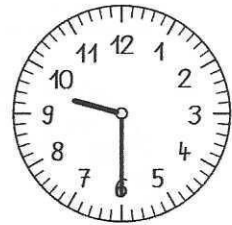

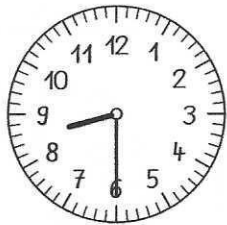
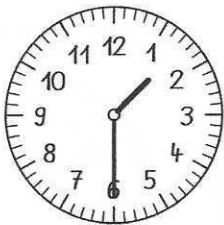
_____ Uhr

_____ Uhr

_____ Uhr

_____ Uhr

_____ Uhr



_____ Uhr

_____ Uhr

_____ Uhr

_____ Uhr

_____ Uhr

_____ Uhr

_____ Uhr

_____ Uhr

Ma/Zeit


Name:



Uhrzeiten - Der Tag hat 24 Stunden





halb 4 Uhr nachts
03:30 Uhr



halb 4 Uhr tagsüber
15:30 Uhr



morgens
tagsüber



abends
nachts



_____ Uhr

_____ Uhr


_____ Uhr



_____ Uhr


_____ Uhr

_____ Uhr




_____ Uhr

_____ Uhr




_____ Uhr

_____ Uhr




_____ Uhr

_____ Uhr




_____ Uhr

_____ Uhr




_____ Uhr

_____ Uhr




_____ Uhr

_____ Uhr



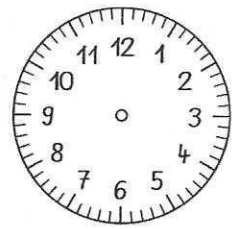
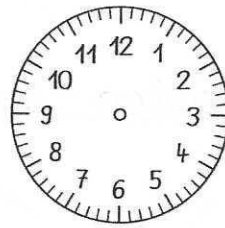
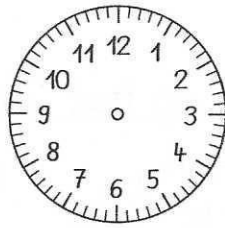
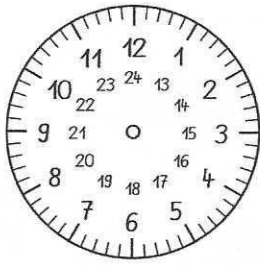
_____ Uhr

_____ Uhr



_____ Uhr

_____ Uhr



_____ Uhr



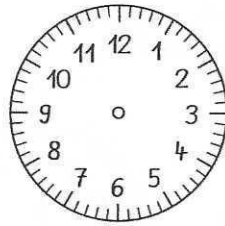

4:00 Uhr

_____ Uhr

17:30 Uhr

_____ Uhr

13:00 Uhr



_____ Uhr

_____ Uhr

10:30 Uhr


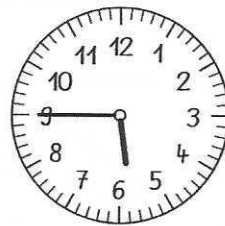

_____ Uhr

0:30 Uhr

14:00 Uhr

_____ Uhr

16:00 Uhr



14:5 _____ Uhr

_____ Uhr

_____ Uhr



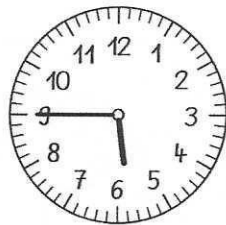
_____ Uhr

_____ Uhr

_____ Uhr

_____ Uhr

_____ Uhr



_____ Uhr

_____ Uhr

_____ Uhr

_____ Uhr

_____ Uhr

_____ Uhr

_____ Uhr

_____ Uhr